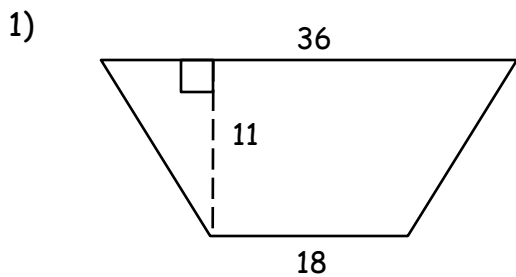
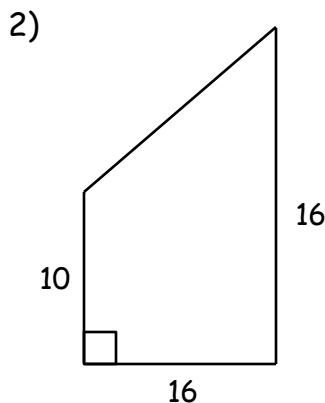


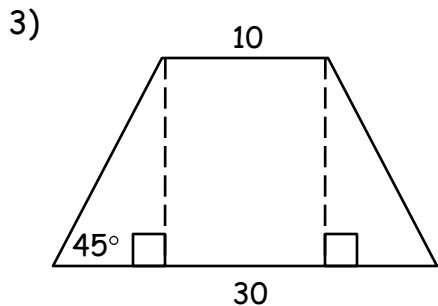
Directions: Find the area and perimeter of each trapezoid. Then, find the length of the median, if necessary. Express your answers in simplified radical form.



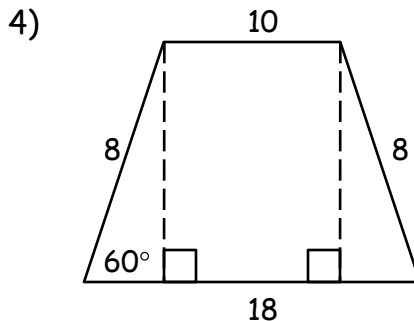
Area = _____



Area = _____
Perimeter = _____



Area = _____
Perimeter = _____



Area = _____
Perimeter = _____

5) Find the area, perimeter and length of the median of an isosceles trapezoid with legs 10 and bases 14 and 26.

Area = _____
Perimeter = _____
Median = _____

6) Find the height and perimeter of an isosceles trapezoid with bases 36in. and 60in., and area 768 in².

Height = _____
Perimeter = _____